





Example 4:

① Select the equivalent fraction.

A. 

B. 

C. 

D. 

Example 5:

Explain why ~~2~~  $\frac{2}{3}$  and  $\frac{6}{9}$  are equivalent fractions?