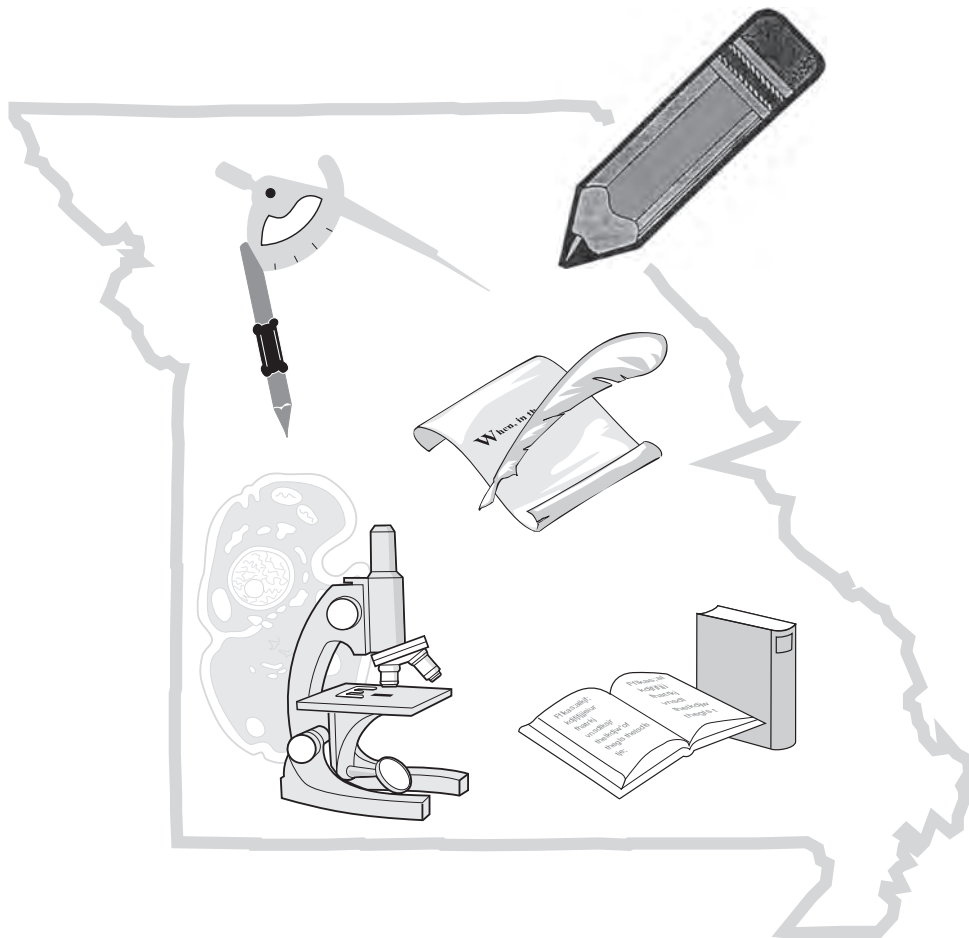


Name: \_\_\_\_\_

District/School: \_\_\_\_\_

# Missouri Assessment Program

# Practice Form Grade 4 Mathematics



**2017–2018**

Missouri Department of Elementary  
and Secondary Education

**Notice of Non-discrimination:**

It is the policy of the Missouri Department of Elementary and Secondary Education not to discriminate on the basis of race, color, religion, gender, national origin, age, or disability in its programs or employment practices as required by Title VI and VII of the Civil Rights Act of 1964, Title IX of the Education Amendments of 1972, Section 504 of the Rehabilitation Act of 1973, the Age Discrimination Act of 1975 and Title II of the Americans with Disabilities Act of 1990.

Inquiries related to Department employment practices may be directed to the Jefferson State Office Building, Human Resources Director, 8th Floor, 205 Jefferson Street, P.O. Box 480, Jefferson City, MO 65102-0480; telephone number (573) 751-9619 or TTY (800) 735-2966. Inquiries related to Department programs and to the location of services, activities, and facilities that are accessible by persons with disabilities may be directed to the Jefferson State Office Building, Office of the General Counsel, Coordinator—Civil Rights Compliance (Title VI/Title IX/504/ ADA/Age Act), 6th Floor, 205 Jefferson Street, P.O. Box 480, Jefferson City, MO 65102-0480; telephone number (573) 526-4757 or TTY (800) 735-2966, email [civilrights@dese.mo.gov](mailto:civilrights@dese.mo.gov).

Anyone attending a meeting of the State Board of Education who requires auxiliary aids or services should request such services by contacting the Executive Assistant to the State Board of Education, Jefferson State Office Building, 205 Jefferson Street, Jefferson City, MO 65102-0480; telephone number (573) 751-4446 or TTY (800) 735-2966.

Inquiries or concerns regarding civil rights compliance by school districts or charter schools should be directed to the local school district or charter school Title IX/non-discrimination coordinator. Inquiries and complaints may also be directed to the Office for Civil Rights, Kansas City Office, U.S. Department of Education, 8930 Ward Parkway, Suite 2037, Kansas City, MO 64114; telephone number (816) 268-0550; FAX: (816) 823-1404; TDD: (877) 521-2172.

**Copyright © 2017 by the Missouri Department of Elementary and Secondary Education. All rights reserved. Based on a template copyright © 2017 by Data Recognition Corporation. Any other use or reproduction of this document, in whole or in part, requires written permission of the Missouri Department of Elementary and Secondary Education and the publisher, Data Recognition Corporation.**

Please use **ONLY** a Number 2 pencil for this session.

# Session 1

# Mathematics

## **Directions**

Now you will be taking the Mathematics Summative Assessment. This test has three sessions that contain different types of questions. Today you will take Session 1. Some questions have answer choices that begin with letters. Circle the letter of each correct answer. Other questions will ask you to circle, write or show your answers. Read each question carefully and follow the directions. Mark all your answers in your test booklet.

## Grade 4 Mathematics - Session 1

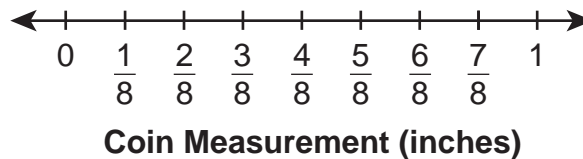
---

- Dustin's cat weighs 8.75 pounds. What is the weight, in pounds, of Dustin's cat written as a number name?
  - eight and seventy-five
  - eight hundred seventy-five
  - eight and seventy-five tenths
  - eight and seventy-five hundredths
  
- Bailey lives 1,284 miles from the Atlantic Ocean. She rounds this distance to a certain place value. Select the **two** numbers that could be Bailey's correctly rounded distance, in miles.
  - 1,200
  - 1,280
  - 1,290
  - 1,300
  - 2,000
  
- Anita's dad is 6 feet tall. How many **inches** tall is Anita's dad?
  - 6 inches
  - 12 inches
  - 62 inches
  - 72 inches
  
- A group of 155 students and 14 adults go on a field trip. They take 4 buses on the field trip. The people going on the field trip are divided as evenly as possible among the 4 buses. What is the greatest number of people on any of the 4 buses?

5. Ken collects coins from different countries. He measures the width, in inches, of each coin. He rounds each width to the nearest  $\frac{1}{8}$  inch. His measurements are listed below.

$$1, \frac{7}{8}, \frac{5}{8}, \frac{4}{8}, \frac{5}{8}, \frac{7}{8}, \frac{6}{8}, 1, \frac{7}{8}$$

Make a line plot to represent Ken's data.



6. Of the members on the school cheer team,  $\frac{3}{12}$  wore shorts at practice. One of the members who wore shorts was a boy, and the other two members who wore shorts were girls. Which equation correctly represents the members of the school cheer team who wore shorts at practice?

- A.  $\frac{3}{12} = \frac{1}{6} + \frac{2}{6}$
- B.  $\frac{3}{12} = \frac{1}{12} + \frac{2}{12}$
- C.  $\frac{3}{12} = \frac{2}{4} + \frac{1}{4}$
- D.  $\frac{3}{12} = \frac{3}{12} + \frac{9}{12}$

7. Alex earned \$3,208 in the month. He had to make a monthly rent payment of \$1,439. How much of the money earned did Alex have left?

- A. \$1,769
- B. \$1,779
- C. \$1,879
- D. \$2,231

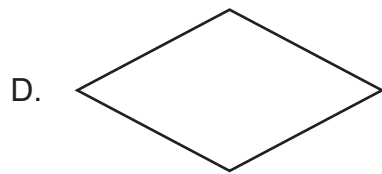
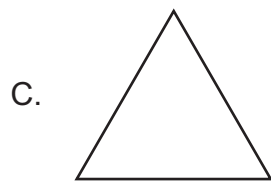
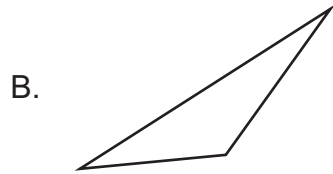
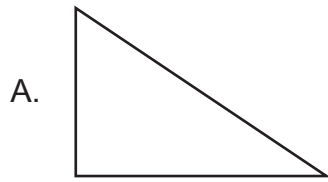
8. The first four terms of a number pattern are shown.

11, 16, 21, 26

What rule describes how to make the number pattern?

- A. Starting at 11, add 5 to each term.
- B. Starting at 11, add 16 to each term.
- C. Starting at 26, add 5 to each term.
- D. Starting at 26, add 11 to each term.

9. Sam draws an equilateral triangle. Which shape could be Sam's shape?

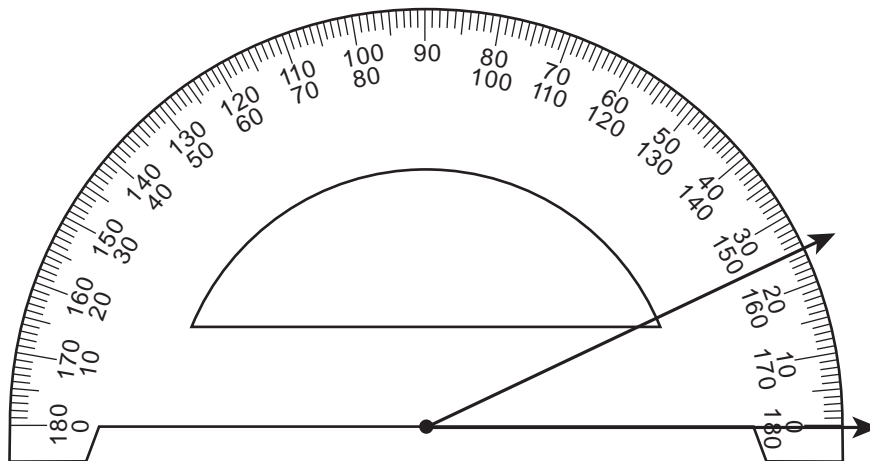


10. Barbara received 6 paychecks for \$1,906 each. To find how much money she earned, Barbara used the expression  $6 \times 1,906$ . How much money, in dollars, did Barbara earn?

11. Marcy exercised for 5 hours last week. She swam for  $\frac{3}{4}$  of the time she exercised last week. How many hours did Marcy swim last week?

- A.  $3\frac{3}{4}$
- B.  $4\frac{1}{4}$
- C.  $4\frac{3}{4}$
- D.  $5\frac{3}{4}$

12. An angle is shown.



What is the measure of the angle?

- A.  $25^\circ$
- B.  $35^\circ$
- C.  $155^\circ$
- D.  $165^\circ$



13. Kelsey writes down her high score in a video game. One of the digits in her high score represents a value that is 10 times greater than the value of another digit in her high score. Which score could be Kelsey's high score?

A. 35,610  
B. 47,753  
C. 56,895  
D. 60,606

14. Tom noticed  $\frac{4}{100}$  of the cars in a parking lot are red. What is the fraction of the red cars written as a decimal?

15. Liam has 4 books. Mason has 3 times as many books as Liam. Which equation shows how to find the number of books Mason has?

A.  $4 + 3 = \square$   
B.  $4 - 3 = \square$   
C.  $4 \times 3 = \square$   
D.  $4 \div 3 = \square$

16. Jackie says her town has one hundred eighty thousand four hundred seventeen people living in it. What is this number written in expanded form?

A.  $180,000 + 400 + 17$   
B.  $100 + 80 + 1,000 + 400 + 17$   
C.  $100,000 + 80,000 + 400 + 10 + 7$   
D.  $100,000 + 80,000 + 4,000 + 100 + 70 + 0$

17. Jeremiah built a rectangular deck that has an area of 198 square feet. The deck has a width of 9 feet. What is the length, in feet, of Jeremiah's deck?

18. Select the **two** prime numbers.

- A. 8
- B. 12
- C. 13
- D. 21
- E. 23

19. Maria measures the areas of two parks in square feet.

- Murphy Park has an area of 21,483 square feet.
- Waterfront Park has an area of 20,395 square feet.

Maria writes  $21,483 > 20,395$  to correctly compare the areas of the two parks.

In each number, circle the digit that can be used to compare the two areas.

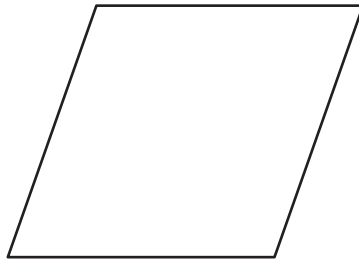
2 1 , 4 8 3

2 0 , 3 9 5

20. Allan ran  $\frac{5}{8}$  of a mile. Garrett ran  $\frac{5}{6}$  of a mile. Allan says he ran farther than Garrett because 8 is greater than 6. Which statement best explains why Allan is **not** correct?

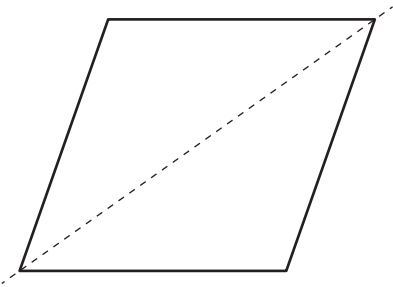
- A. Garrett ran farther because  $\frac{5}{6}$  is the same as  $\frac{7}{8}$ , and  $\frac{7}{8}$  is greater than  $\frac{5}{8}$ .
- B. Garrett ran farther because  $5 + 6 = 11$  and  $5 + 8 = 13$ , and 11 is less than 13.
- C. Allan and Garrett ran the same distance because they both ran 5 parts of a mile.
- D. Garrett ran farther because each of the 5 parts of a mile he ran is greater than each of the 5 parts of a mile Allan ran.

21. A rhombus is shown.

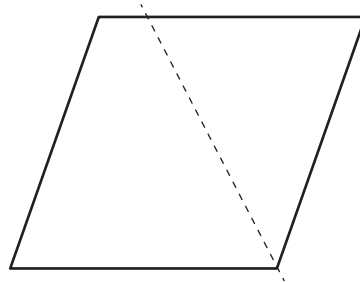


Which diagram shows the correct line of symmetry for the rhombus?

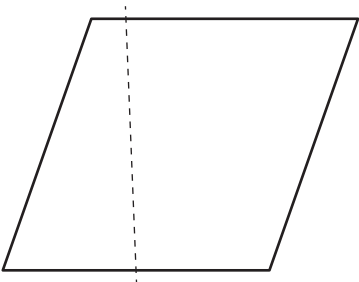
A.



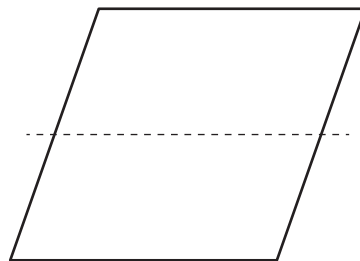
B.



C.



D.



# **ATTENTION!**

**Do NOT go on  
until you are  
told to do so.**



Please use **ONLY** a Number 2 pencil for this session.

## Session 2

# Mathematics

### **Directions**

Now you will be taking Session 2 of the Mathematics Summative Assessment. This session includes different types of questions. Some questions will have answer choices that begin with letters. Circle the letter of each correct answer. Other questions will ask you to circle, write or show your answers. Read each question carefully and follow the directions. Mark all your answers in your test booklet.

1. Select the **three** fractions that are equivalent to  $\frac{6}{9}$ .

A.  $\frac{2}{3}$

B.  $\frac{3}{6}$

C.  $\frac{4}{6}$

D.  $\frac{5}{8}$

E.  $\frac{7}{10}$

F.  $\frac{8}{12}$

2. Katharine counts how many people are on the bus each day when she gets on. She counts this number for 20 days. She makes a frequency table to show her data.

**People on the Bus Each Day**

Number of People on Bus	Number of Days
4	3
5	1
6	8
7	5
8	3

Each statement below describes a specific value. Order the statements from the least value to the greatest value by writing the numbers of the statements in the boxes.

least value

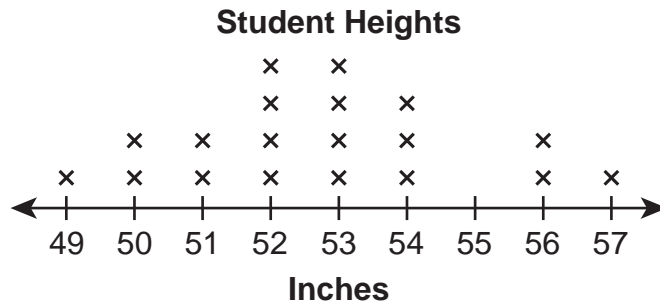
greatest value

1 the range of the number of people on bus

2 the mode of the number of people on bus

3 the number of people on bus that occurs the least

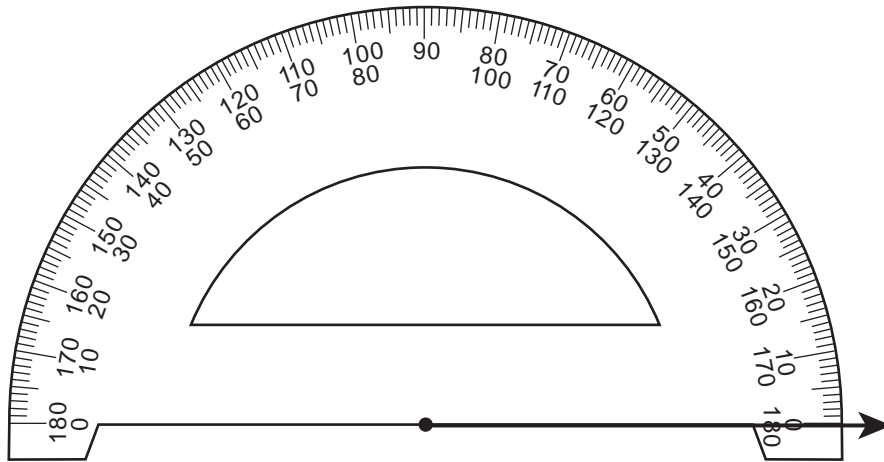
3. Sara has 515 rocks in her rock collection. She wants to divide her rocks equally into 4 boxes. What is the fewest number of rocks that Sara could **not** put in boxes?
- A. 0  
 B. 1  
 C. 2  
 D. 3
4. Ms. Li made a line plot showing the height of each student in her classroom.



Select the **two** heights, in inches, that are the modes of Ms. Li's data.

- A. 49  
 B. 52  
 C. 53  
 D. 54  
 E. 58
5. Miguel brings 3 pies to a bake sale. He sells  $1\frac{3}{8}$  pies in the first hour of the bake sale and  $1\frac{2}{8}$  pies in the second hour of the bake sale. What fraction describes the total number of pies Miguel sells in the first two hours of the bake sale?

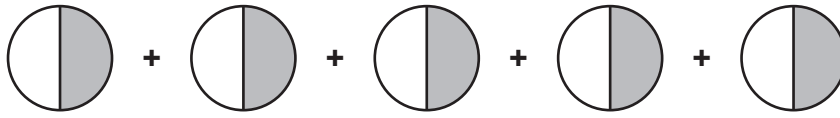
6. One ray of an angle is shown below. Use the protractor to draw another ray so that the angle formed by the two rays is  $50^\circ$ .



7. Rachel says that 2, 5, and 7 are all factors of her favorite number. Select the **three** statements that must be true about Rachel's favorite number.
- A. Rachel's favorite number must be 70.
  - B. Rachel's favorite number must be even.
  - C. Rachel's favorite number must end in a 5.
  - D. Rachel's favorite number could have 10 as a factor.
  - E. Rachel's favorite number must have at least one more factor.
  - F. Rachel's favorite number could be either of 2 different numbers less than 100.
8. Last year, a museum had eighty-five thousand twenty visitors. What is the number of visitors the museum had last year as a base ten numeral?



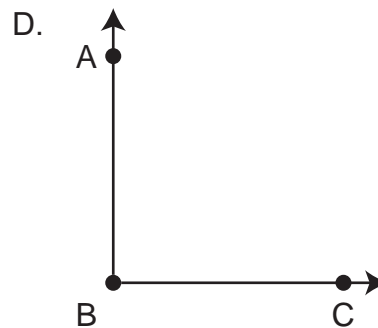
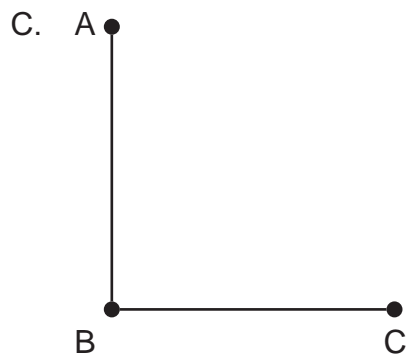
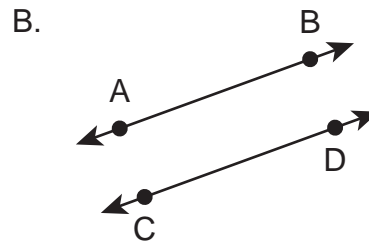

9. A model is shown.



Which expression represents the model?

- A.  $\frac{5}{10}$
- B.  $\frac{1}{2} + 5$
- C.  $\frac{1}{2} \times \frac{1}{5}$
- D.  $\frac{1}{2} \times 5$

10. Which diagram shows two perpendicular line segments?



11. The students and teachers at Maple Grove Elementary are going on a school trip. There are 16 school buses that are each taking 48 people on the trip. What is the total number of people on all 16 school buses?
- A. 288
  - B. 336
  - C. 728
  - D. 768
12. Sam has  $\frac{3}{4}$  gallon of milk. How many **pints** of milk does he have?
- A. 3
  - B. 6
  - C. 12
  - D. 24
13. Suzie has 10 marbles and adds 2 marbles to her collection each week. Which pattern represents the number of marbles she has for week 0 through week 4?
- A. 2, 4, 6, 8, 10
  - B. 2, 4, 8, 16, 32
  - C. 10, 12, 14, 16, 18
  - D. 10, 20, 40, 80, 160
14. The city of Franklin has a population of 46,578. The city of Valley Grove has a population of 51,926. Both populations are rounded to the nearest thousand. What is the **best** estimate for the combined population of the two cities?
- A. 90,000
  - B. 97,000
  - C. 99,000
  - D. 100,000

15. Ramon, Samantha, and Taj went to a picnic. They ate a total of  $\frac{5}{8}$  pound of potato salad. To show the fraction of a pound of potato salad that each person could have eaten, Taj wrote the equation shown.

$$\frac{\square}{8} + \frac{\square}{8} + \frac{\square}{8} = \frac{5}{8}$$

Write a number from 1 to 8 in each box to show the fraction of a pound of potato salad that each person could have eaten.

$$\frac{\square}{8} + \frac{\square}{8} + \frac{\square}{8} = \frac{5}{8}$$

16. A school cafeteria prepared chicken nuggets for lunch. Each of 432 students was served 6 chicken nuggets. At the end of lunch, there were 43 chicken nuggets left unserved. How many chicken nuggets did the cafeteria prepare for lunch?
- A. 475  
B. 481  
C. 2,549  
D. 2,635
17. John decorates a poster in the shape shown.



Select the **two** categories that describe the shape of John's poster.

- A. square  
B. triangle  
C. rhombus  
D. rectangle  
E. quadrilateral

18. Jerry ran  $\frac{4}{10}$  of a mile. Which number could Jerry use to show the distance, in miles, he ran?

- A. 0.04
- B. 0.4
- C. 4
- D. 14

19. Travis solves a math problem on a piece of paper. On the paper, Travis shows how he finds the perimeter of a rectangular poster by adding all four side lengths together—but the paper gets torn. Part of the piece of paper is shown.



4 feet + 3 feet + 3 feet +

What is the perimeter, in feet, of the poster?

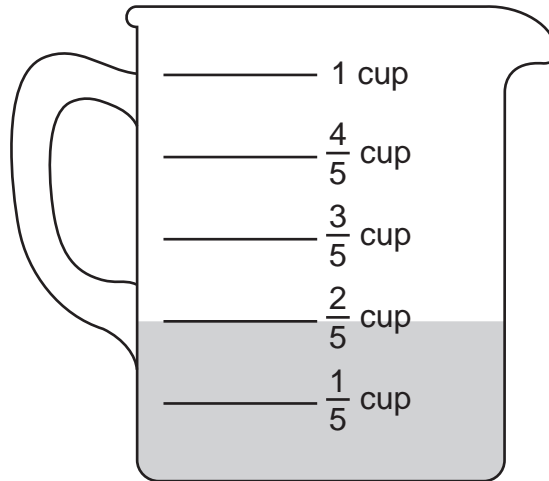
- A. 10
- B. 12
- C. 13
- D. 14

20. There are 13,517 students in the Anoka School District and 22,419 students in the Brower School District. Which statement about the number of students in the Anoka and Brower School Districts is true?
- A. The number of students in the Anoka School District is less than the number of students in the Brower School District. The value of the tens place in the number of students in the Anoka School District is less than the value of the tens place in the number of students in the Brower School District.
  - B. The number of students in the Anoka School District is less than the number of students in the Brower School District. The value of the ten thousands place in the number of students in the Anoka School District is less than the value of the ten thousands place in the number of students in the Brower School District.
  - C. The number of students in the Anoka School District is greater than the number of students in the Brower School District. The value of the hundreds place in the number of students in the Anoka School District is greater than the value of the hundreds place in the number of students in the Brower School District.
  - D. The number of students in the Anoka School District is greater than the number of students in the Brower School District. The value of the thousands place in the number of students in the Anoka School District is greater than the value of the thousands place in the number of students in the Brower School District.

## Grade 4 Mathematics - Session 2

---

21. Sara used a total of 1 cup of liquid for a recipe. She used  $\frac{2}{5}$  cup of vinegar, and the rest of the liquid she used was milk.



How much milk, in cups, did Sara use for the recipe?

- A.  $\frac{2}{5}$
- B.  $\frac{3}{5}$
- C.  $\frac{5}{5}$
- D.  $1\frac{2}{5}$

# **ATTENTION!**

**Do NOT go on  
until you are  
told to do so.**



Please use **ONLY** a Number 2 pencil for this session.

## Session 3


# Mathematics


### **Directions**

Now you will be taking Session 3 of the Mathematics Summative Assessment. This session includes a Performance Event that contains a set of questions based on a common task or scenario. Some questions will have answer choices that begin with letters. Circle the letter of each correct answer. Other questions will ask you to circle, write or show your answers. Read each question carefully and follow the directions. Mark all your answers in your test booklet.



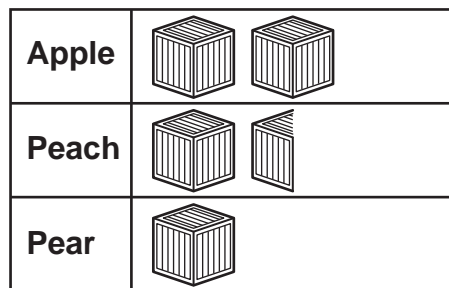
Josie has a small farm. She has 3 kinds of fruit trees on her farm. The number of each type of fruit tree on her farm is shown in the picture graph below.



**Key:**  = 6 trees

Each Saturday morning, she picks fruit to sell at a market. The number of boxes of each type of fruit she picked last Saturday is shown in the picture graph below. Each box holds 15 pounds of fruit.

**Boxes of Fruit Brought to Market**



**Key:**  = 2 boxes

1. Use the **Trees on Josie's Farm** picture graph to answer the question.  
 How many more pear trees than peach trees does Josie have on her farm?
  - A. 1
  - B. 6
  - C. 9
  - D. 15


2. Use the **Trees on Josie’s Farm** picture graph to answer the question.

Josie’s apple trees are planted in rows. Each row has the same number of apple trees. There are at least 6 apple trees in each row. There are at least 2 rows. Complete the table to show the number of rows and apple trees that Josie could have on her farm.

Number of Rows	Apple Trees in Each Row

3. Use the **Boxes of Fruit Brought to Market** picture graph to answer the question.

Josie makes a picture graph to show the total number of pounds of each type of fruit she brought to the market. Use the symbols to draw a picture graph to show the total number of pounds of each of the three types of fruit that Josie brought to market.



4. Use the **Trees on Josie’s Farm** picture graph to answer the question.

Josie plants more peach and pear trees.

- When she is done, she has more peach trees than pear trees.
- When she is done, she has more pear trees than apple trees.

What is the fewest number of trees Josie could have planted?

# **ATTENTION!**

**Do NOT go on  
until you are  
told to do so.**



Data Recognition Corporation  
13490 Bass Lake Road  
Maple Grove, MN 55311  
800.826.2368 | [www.datarecognitioncorp.com](http://www.datarecognitioncorp.com)

