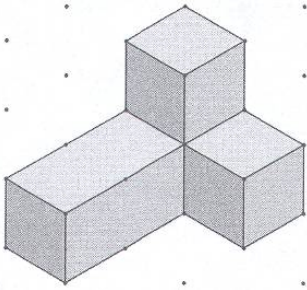
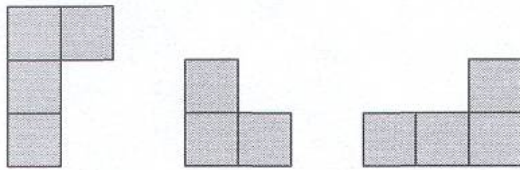


**Problem:**

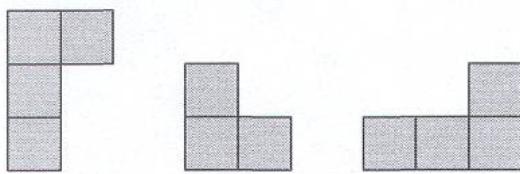
Below is a view of a building drawn from the front right corner of the building.



Three additional drawings of the building are shown below. Identify each as the right view, front view, or base outline.



**Answer:**



base outline

front view

right view